

# **Eureka Math**

## **Module 6**

**3rd Grade Math Vocabulary**
















**By Miss Katie**

# Scale



**\*\*\* A set of numbers that represents the data in a graph.**

# Data

Favorite Snack						
 Popcorn						
 Carrots						
 Apples						

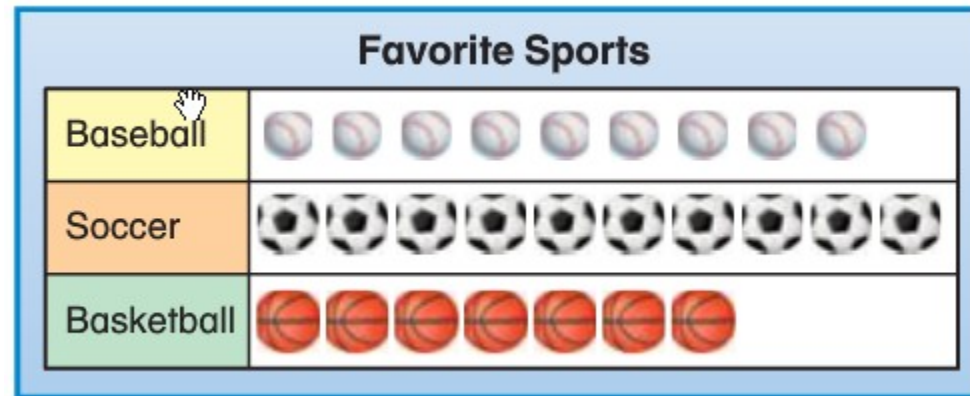
**\*\*\* Collected information  
or facts.**

# Survey

What Will You Do For Lunch Today?	
Lunch	Tally
Pack	
Buy	
Buy Milk Only	


**\*\*\*To collect data by asking people the same question.**

# Picture Graph



**\*\*\* A graph that uses different pictures to represent each tally.**

# Line Plot



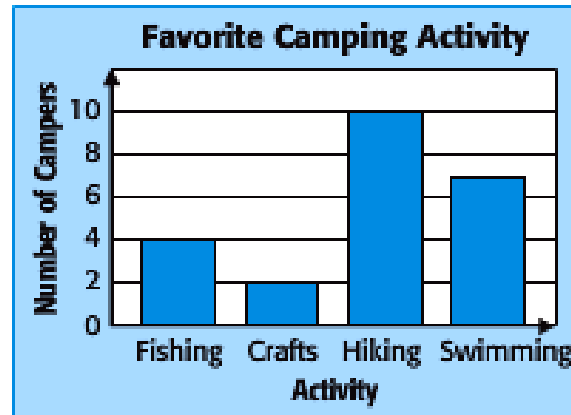
**\*\*\*A graph that uses Xs above a number line to show how often data value occurs.**

# Frequent

How Do You Travel to School?	
Method	Frequency
Bicycle	3
Bus	6
Car	9
Walk	5

**\*\*\*The number of times each result occurs.**

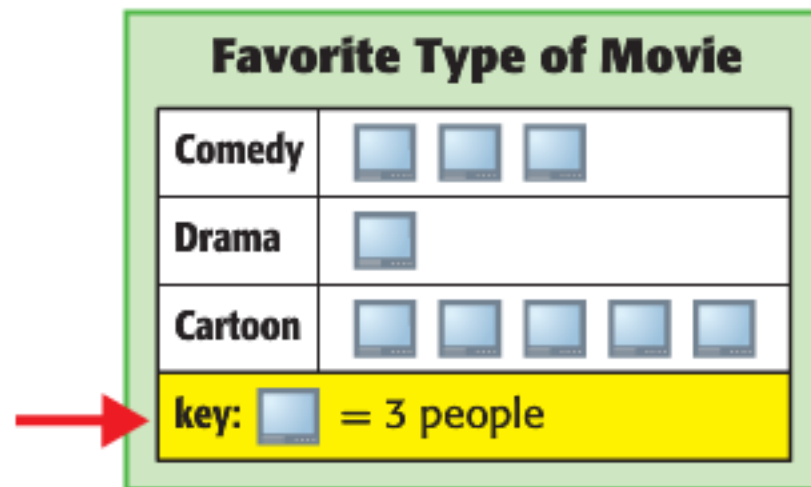
# Bar Graph



**\*\*\*A graph that compares data by using bars of different lengths or heights to show the values.**



# Key



**\*\*\*Tells how many each symbol represents.**